

12 Teken de stand van de manen op  $t = 5,32$  d. Leg je antwoord uit met behulp van een berekening.

.....

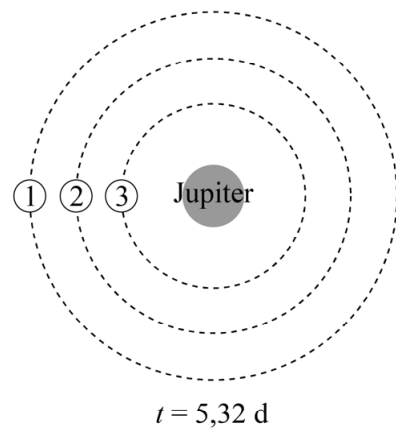
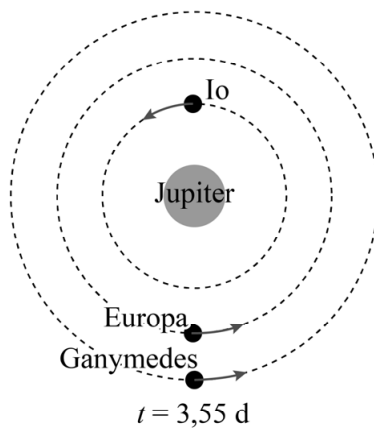
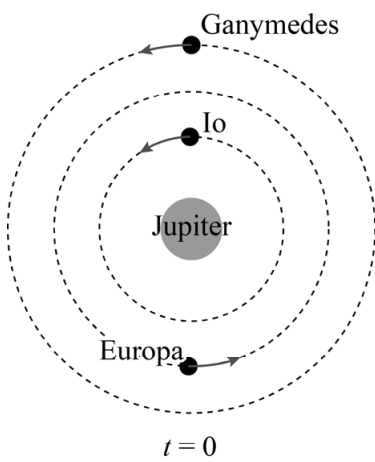
.....

.....

.....

.....

.....



Legenda:  
 1 baan Ganymedes  
 2 baan Europa  
 3 baan Io